

**1.1 Where Does It Go?**

Focus: budgeting

**Warm Up**

1. Use pictures or words to explain one way you can use coins to total one dollar.

2. Name 3 different places where you use money.

---



---



---

3. An item costs 45¢. Circle the coins that you would give the cashier.





4. If you have the following coins in your pocket, how much money do you have?


**Skills Practice 1: Money**

1. This amount of money can be written as 25¢ or \$0.25. Write each of the following amounts of money in 2 ways.




a)  \_\_\_\_\_ ¢ \$ \_\_\_\_\_


b)  \_\_\_\_\_ ¢ \$ \_\_\_\_\_

c)  \_\_\_\_\_ ¢ \$ \_\_\_\_\_

2. Write each of the following amounts of money in 2 ways

a)  \_\_\_\_\_

b)  \_\_\_\_\_

c)  \_\_\_\_\_

3. Add.

a)  $\begin{array}{r} \$1.00 \\ + \$2.00 \\ \hline \end{array}$

b)  $\begin{array}{r} \$1.50 \\ + \$3.50 \\ \hline \end{array}$

c)  $\begin{array}{r} \$2.25 \\ + \$1.30 \\ \hline \end{array}$

d)  $\begin{array}{r} \$0.20 \\ \$1.10 \\ + \$1.45 \\ \hline \end{array}$

4. Subtract.

a)  $\begin{array}{r} \$7.00 \\ - \$4.00 \\ \hline \end{array}$

b)  $\begin{array}{r} \$2.50 \\ - \$1.00 \\ \hline \end{array}$

c)  $\begin{array}{r} \$5.65 \\ - \$3.20 \\ \hline \end{array}$

d)  $\begin{array}{r} \$8.75 \\ - \$0.52 \\ \hline \end{array}$

5. Circle the correct money value for each of the following calculator displays.

a)       \$16.50      \$16.05

b)       \$0.05      \$0.50

c)       \$1.50      \$15.00

### Tech Tip

On calculators, computers, automated teller machines (ATMs), and cash registers, you often have to enter money values.

To enter \$12.50 on your calculator, press

12  50

Press .

How does your calculator display the value 12.50?



**Spending Money**

- People spend money every day.
- What do you spend money on?
- What do other people buy for you?

1. List 6 things you spend money on during the week.  
Estimate how much you spend on each item each week.



Item	How Much Do You Spend On This Item Each Week?
a)	
b)	
c)	
d)	
e)	
f)	



2. List 6 things that other people buy for you during the week.



Item	Who Buys It For You?
a)	
b)	
c)	
d)	
e)	
f)	



